

Mr Broxholme's Geography and Science quiz Part 2

Question 6 - How would you describe the weather in Nassau in the Bahamas?



Question 7 - Can you name these four physical features?







Question 8 - Can you identify the two types of tree below?





Mr Broxholme's Geography and Science quiz Part 2

Question 9 - Look at the pictures below. What season would you associate with each picture? E.g. ice cream - summer



Question 10 - Look at the aerial photograph of London below. What features can you spot? E.g. bridge

